

Name _____

to follow text page 275

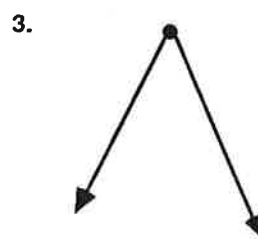
Angles

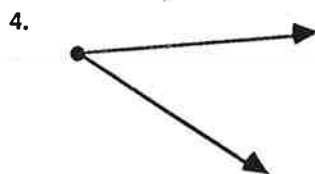
Practice

Write right, acute, or obtuse for each angle.



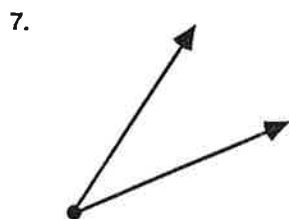


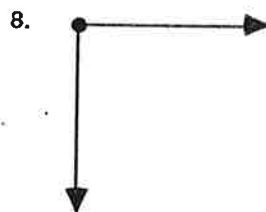














Mixed Practice

Write $<$, $>$, or $=$ for each number pair.

10. 1.38 _____ 1.04

11. 0.087 _____ 0.078

12. 0.19 _____ 0.9

13. $\frac{3}{4}$ _____ $\frac{1}{2}$

14. $\frac{3}{8}$ _____ $\frac{3}{5}$

15. $\frac{5}{6}$ _____ $\frac{3}{7}$

16. $\frac{7}{5}$ _____ $\frac{4}{3}$

17. $\frac{3}{6}$ _____ $\frac{4}{8}$

18. 1.376 _____ 1.637